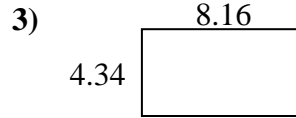
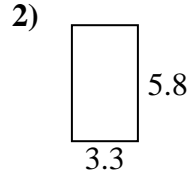
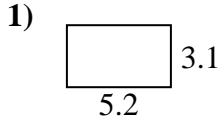




Find the perimeter and area of each figure. Each figure is in centimeters (cm). Not to scale.

Answers



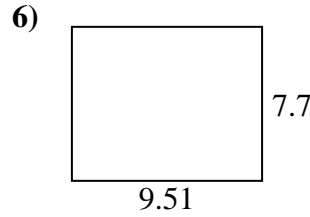
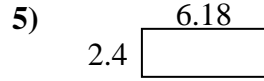
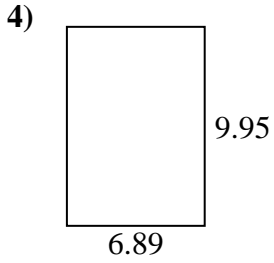
1. _____

2. _____

3. _____

4. _____

5. _____

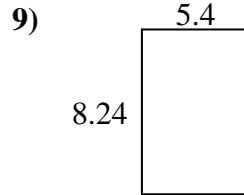
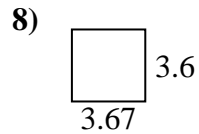
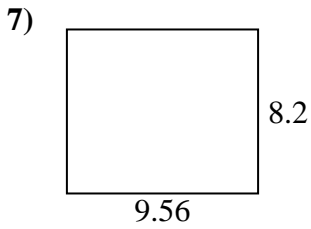


6. _____

7. _____

8. _____

9. _____

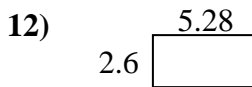
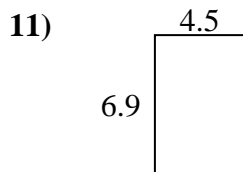
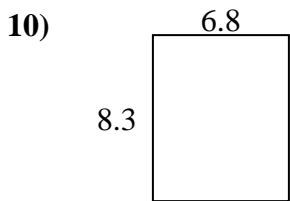


10. _____

11. _____

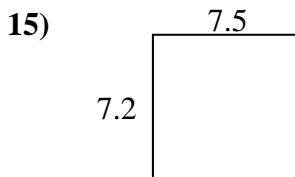
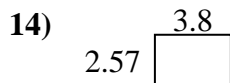
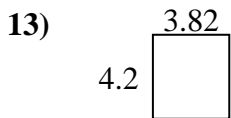
12. _____

13. _____



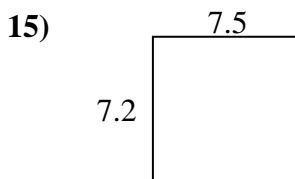
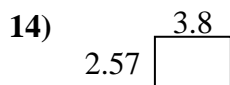
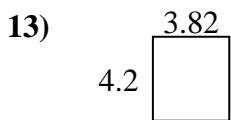
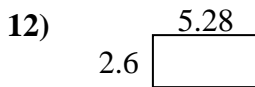
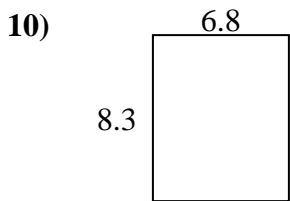
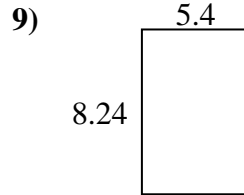
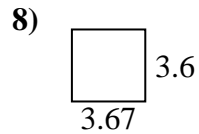
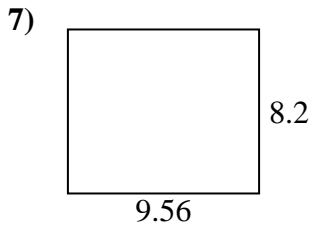
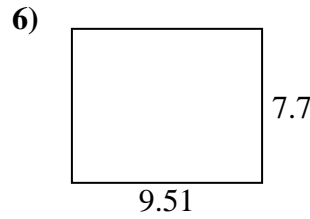
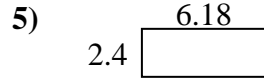
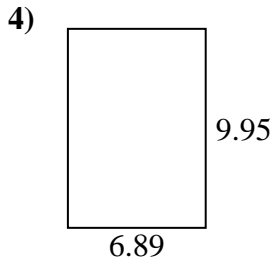
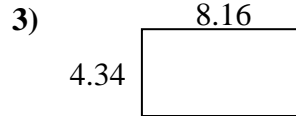
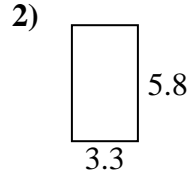
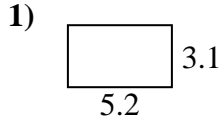
14. _____

15. _____





Find the perimeter and area of each figure. Each figure is in centimeters (cm). Not to scale.



Answers

1. 16.6 cm 16.12 cm²
2. 18.2 cm 19.14 cm²
3. 25 cm 35.4144 cm²
4. 33.68 cm 68.5555 cm²
5. 17.16 cm 14.832 cm²
6. 34.42 cm 73.227 cm²
7. 35.52 cm 78.392 cm²
8. 14.54 cm 13.212 cm²
9. 27.28 cm 44.496 cm²
10. 30.2 cm 56.44 cm²
11. 22.8 cm 31.05 cm²
12. 15.76 cm 13.728 cm²
13. 16.04 cm 16.044 cm²
14. 12.74 cm 9.766 cm²
15. 29.4 cm 54 cm²